

LESSON

4

Measurement and Geometry

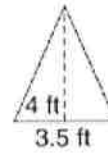
Practice B: Area of Triangles and Trapezoids

Find the area of each triangle.

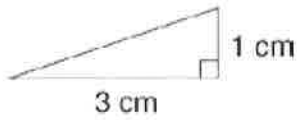
1.



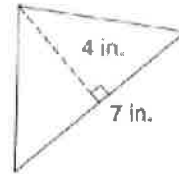
2.



3.

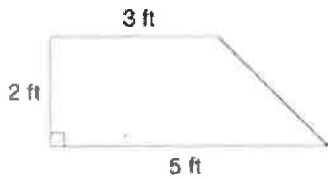


4.

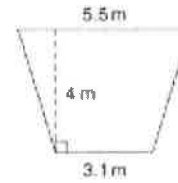


Find the area of each trapezoid.

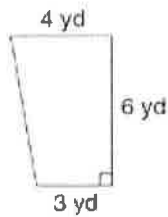
5.



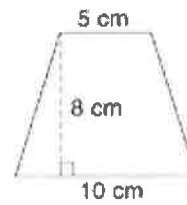
6.



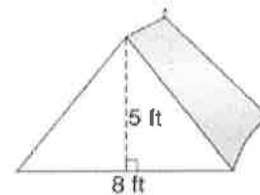
7.



8.



9. The front part of a tent is 8 feet long and 5 feet tall. What is the area of the front part of the tent?



LESSON

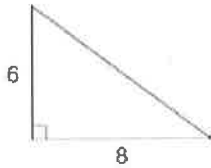
4

Measurement and Geometry

Puzzles, Twisters & Teasers: Hear, Hear!

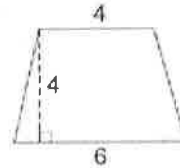
Find the area of each figure below and circle the letter next to the correct answer. Write the letters over the number of the problem in the corresponding space in the riddle.

1.



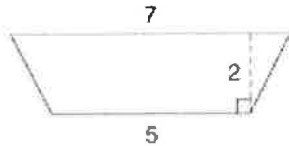
- E** 24 units² **B** 26 units² **X** 28 units²

2.



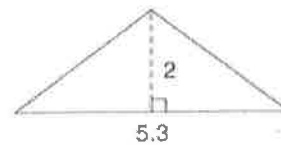
- A** 20 units² **F** 24 units² **G** 40 units²

3.



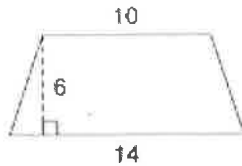
- O** 10 units² **R** 12 units² **P** 24 units²

4.



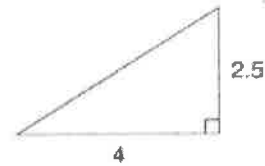
- C** 5.1 units² **Q** 5.2 units² **D** 5.3 units²

5.



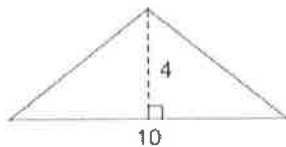
- L** 24 units² **E** 48 units² **R** 72 units²

6.



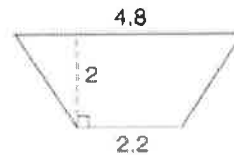
- V** 4 units² **U** 5 units² **I** 6 units²

7.



- M** 20 units² **H** 21 units² **W** 40 units²

8.



- J** 5 units² **N** 6 units² **S** 7 units²

What part of your body has the most rhythm?

- _____
 1. 2. 3. 4. 5. 6. 7. 8.